


Subtraction – crossing 10 (1)

1 Rosie has 15 cakes.



Her friends eat 6 cakes.

How many cakes does Rosie have left?

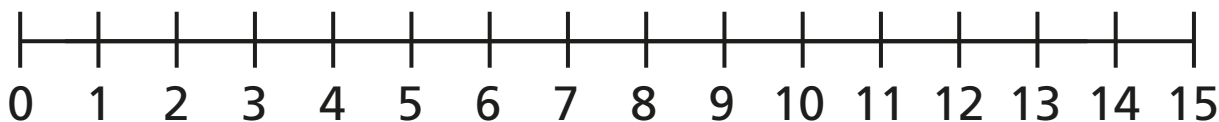
$$\square - \square = \square$$

Rosie has cakes left.

2 Jack has 13 stickers.

He gives 7 stickers to Dora.

How many stickers does Jack have left?



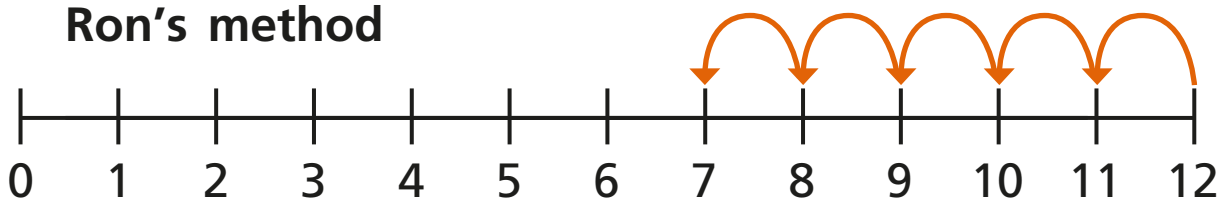
$$\square - \square = \square$$

Jack has stickers left.

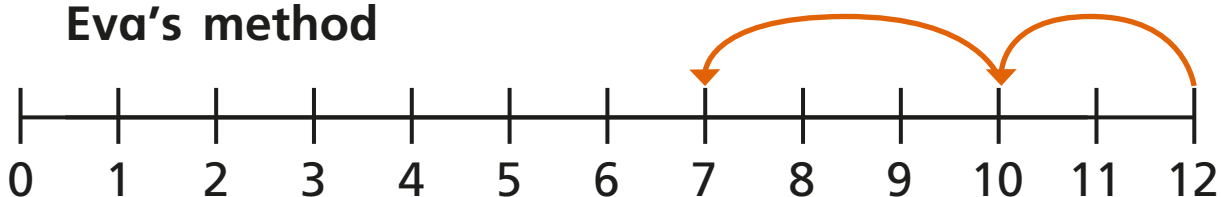


- 3 Ron and Eva have worked out $12 - 5$ on a number line.

Ron's method

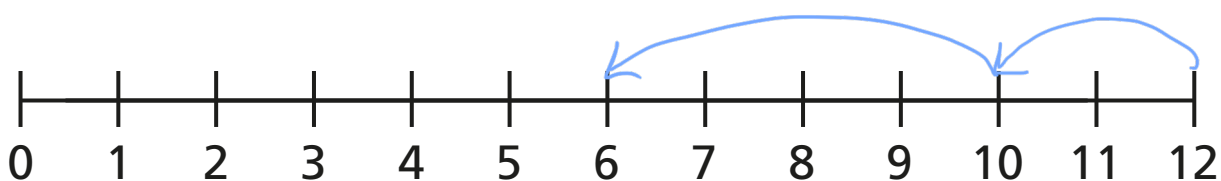


Eva's method

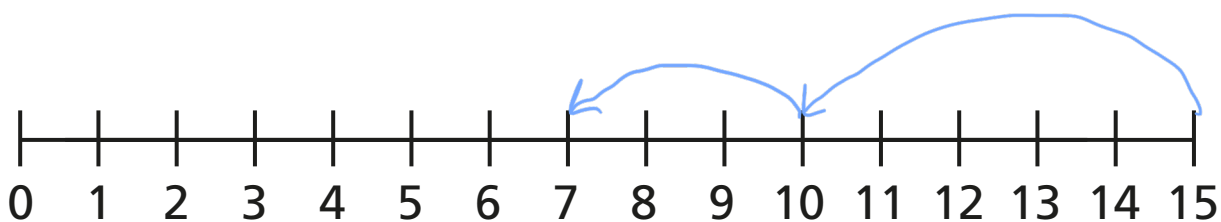


- a) What is the same and what is different?
- b) Use Eva's method to complete the subtractions.

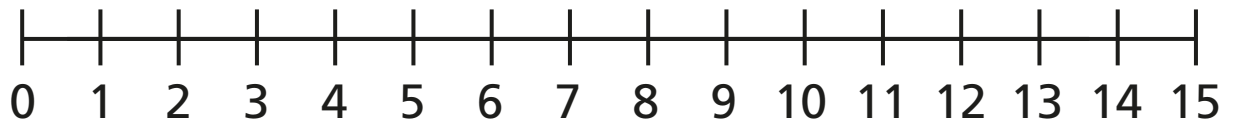
$$12 - 6 = \boxed{6}$$



$$15 - 8 = \boxed{7}$$

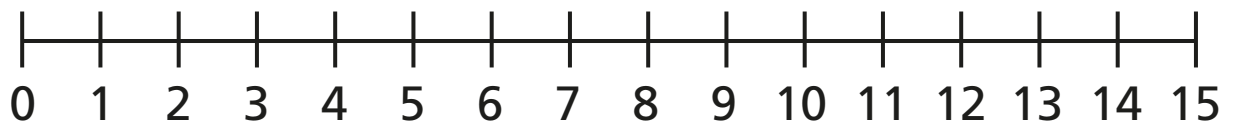


$$14 - 9 = \square$$



4 Fill in the missing numbers.

$$14 - \square = 8$$



$$\square - 6 = 7$$

