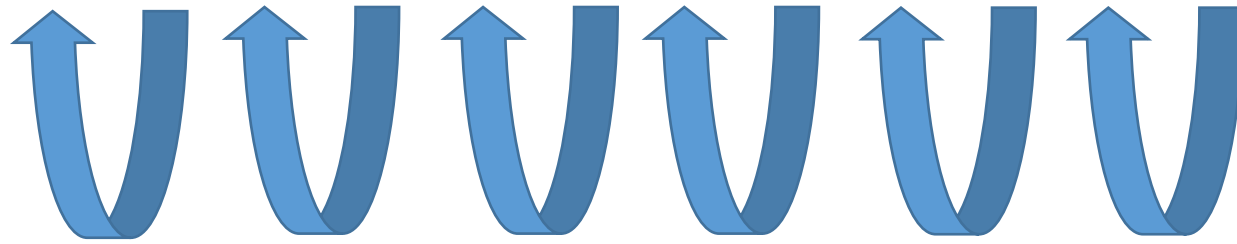
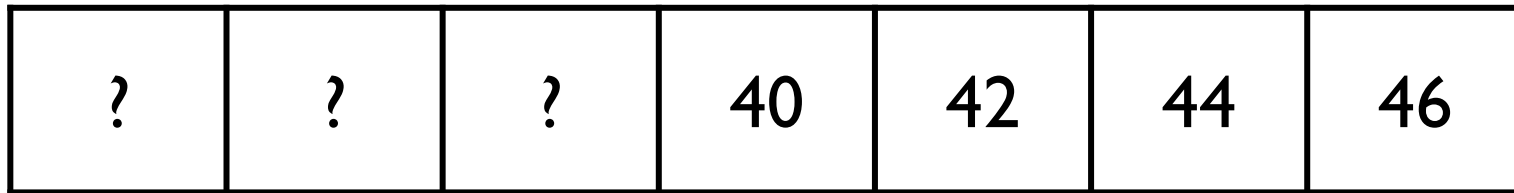


Count in 2s backwards to complete the number track.



2 less   2 less   2 less   2 less   2 less   2 less

If you continue counting, will you say the number 25?

# Always, sometimes, never...



When you count in twos,  
your digits will be 0, 2, 4, 6, 8


Prove it!

Rosie counts back from 50 in 2s.  
Amir counts up from 12 in 2s.



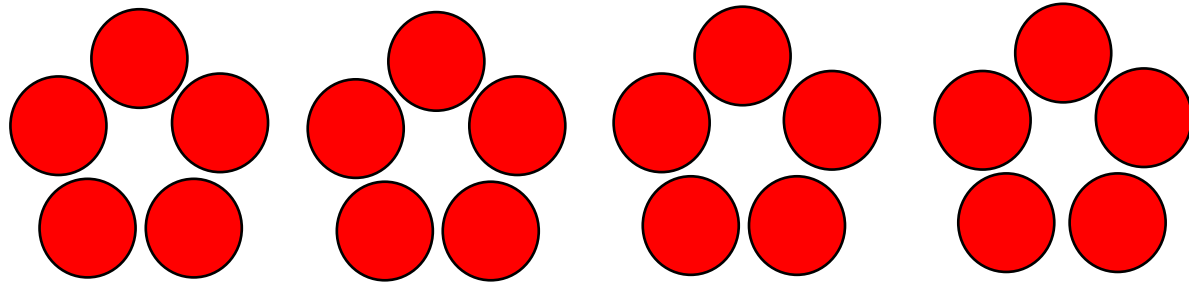
50, 48, 46, 44...

12, 14, 16...



They say their numbers together.  
Who will say 30 first.

Amir is making this flower pattern with counters.



Annie says,



If you make 9 flowers, you will  
use 43 counters.

Do you agree with Annie?  
Explain your answer.

# Odd One Out

25

30

27

45

Which is the odd one out? Explain your answer.